



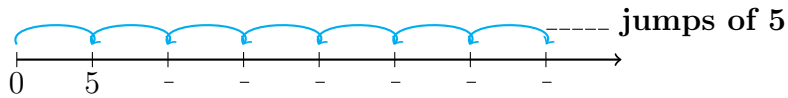
Grade 3

Chapter 02

Multiplication Facts and Strategies

Multiply by 5

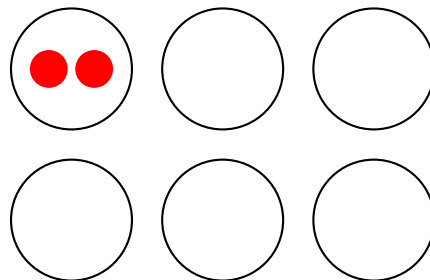
1. Complete the model and the equation.



----- × ----- = -----

2.

5 Groups of 2:



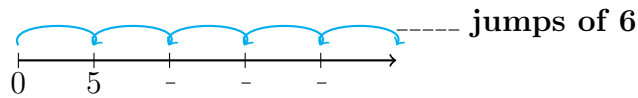
$$\text{-----} \times \text{-----} = \text{-----}$$

3. Your teacher has 5 packs of spinning toys. There are 5 toys in each pack. There are 27 students in your class. Does every student get a spinning toy?

4. You recycle 9 bottles and receive 5¢ for each bottle. You spend 25¢ on a pack of gum. How many cents do you have left? How many more bottles do you need to recycle to buy another pack of gum?

Homework and Practice

1. Complete the model and the equation.



$$\text{-----} \times \text{-----} = \text{-----}$$

2. Descartes earns \$5 for each lawn that he mows. He mows 7 lawns. He spend \$20 on a video game. How much money does he left? How many more lawns does Descartes have to mow to buy another video game?

3. A firefighter visits 5 houses. Each house has 3 smoke detectors that need a new battery. She has 18 batteries. Does every smoke detector get a new battery?

Visit Our Website: <https://mathaversity.com/>